
May 11-15th

— Virtual Learning —

Weekly Learning Targets

Math: I can solve word problems within 20 focusing on all 1st grade structures mixed together.

Reading: I can identify the main idea in a nonfiction text.

Weekly Must Do:

- **Weekly Slide (all learning videos and practice work).**
- **Showbie work**

District requirement for virtual learning at home:

2-3 hours TOTAL of work per day. This can be a combination of must do and may do work.

**Weekly May Do:
Use these if you need extra practice:
Freckle
Smarty Ants
Choice Boards
Spanish Extension
Activities**

Parents-Please Read!!!!


We realize we have had some difficulty with links not working in the past. If you find a link isn't working on this slide, please copy and paste the link into your web browser.

Monday-ELA

1. Log into your Raz kids account and read the book "Owls Overhead" in the assignment section.
2. Watch the video below to learn how to fill out a bubble map with main idea and details.

https://youtu.be/DdU0HH5_X34

3. Submit your work to your teacher on Remind.



Monday Spelling and Phonics

1. Daily Letterland Lesson:

<https://youtu.be/FubnD-8NSao>

2. Mapping Phonics Lesson:

What is mapping?

https://www.youtube.com/watch?v=F3D_39l6fml&feature=youtu.be

Mapping lessons:

<https://cobras1st.weebly.com/>

Go to the tab that says “mapping” and choose the level you need.



Monday-Math

Today we will work on addend unknown and comparing word problems. Watch the video below.

https://youtu.be/nw8BzFa_zSA

Answer the following problems to the right on a separate piece of paper and send to your teacher on Remind.

There are 16 kids at the park. 7 are girls and the rest are boys. How many boys are at the park?

Step 1- Write the equation (number sentence): _____

Step 2- Show your work to solve:

Step 3- Write the answer: _____ boys

Cayden has 13 pencils. Ben has 8 pencils. How many more pencils does Cayden have than Ben?

Step 1- Write the equation (number sentence): _____

Step 2- Show your work to solve:

Step 3- Write the answer: _____ pencils

Cayden has 13 pencils Ben has 8 pencils. How many fewer pencils does Ben have than Cayden?

Step 1- Write the equation (number sentence): _____


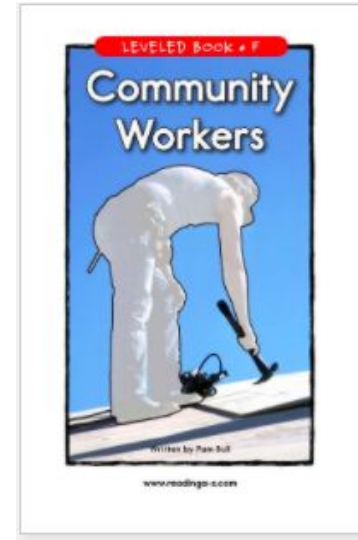
Step 2- Show your work to solve:

Step 3- Write the answer: _____ pencils

Tuesday- ELA

Today you will practice main idea and details on your own.

1. Log into your Raz Kids account and find the book 'Community Workers' in your assignment section.
2. On a separate piece of paper fill out the bubble map with the main idea and details from the story.



Tuesday Spelling and Phonics

1. Daily Letterland Lesson:

<https://youtu.be/eHRocBAZQ-Q>

2. Mapping Phonics Lesson:

What is mapping?

https://www.youtube.com/watch?v=F3D_39l6fml&feature=youtu.be

Mapping lessons:

<https://cobras1st.weebly.com/>

Go to the tab that says “mapping” and choose the level you need.



Tuesday-Math

Today you will practice some more word problems.

Answer the problems to the right on a separate piece of paper and send to your teacher on Remind.

There are 14 ducks in a pond. 5 ducks are white and the rest are brown. How many ducks are brown?

|

Step 1- Write the equation (number sentence): _____

Step 2- Show your work to solve:

Step 3- Write the answer: _____ ducks

Jenny has 19 flowers. Zamir has 5 flowers. How many more flowers does Jenny have than Zamir?

Step 1- Write the equation (number sentence): _____

Step 2- Show your work to solve:

Step 3- Write the answer: _____ flowers

Jenny has 19 flowers. Zamir has 5 flowers. How many fewer flowers does Jenny have than Zamir?

Step 1- Write the equation (number sentence): _____

Step 2- Show your work to solve:

Step 3- Write the answer: _____ flowers

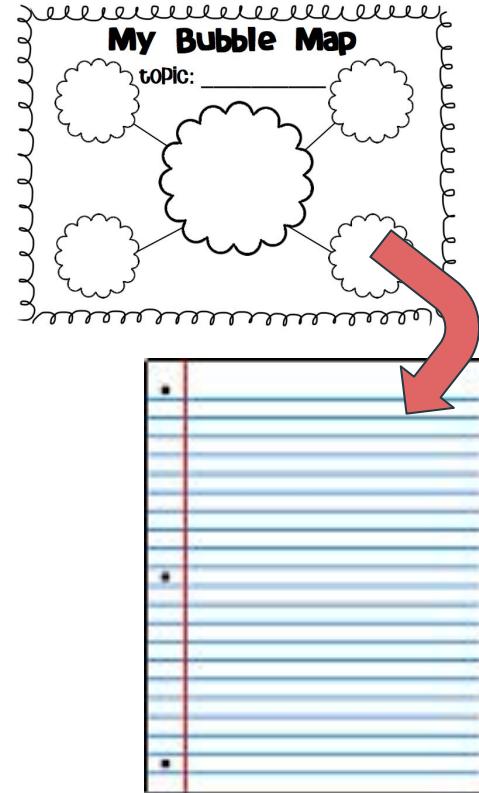
Wednesday- ELA

Today you will continue learning about main idea as you work to turn your main idea bubble map from Monday into a paragraph.

Grab a piece of paper and watch

<https://youtu.be/NVwC50IJ2E>

Follow along as you learn to write your paragraph. Take a picture and post it to Remind.



Wednesday Spelling and Phonics

1. Daily Letterland Lesson:

<https://youtu.be/34YDMkQALik>

2. Mapping Phonics Lesson:

What is mapping?

https://www.youtube.com/watch?v=F3D_39l6fml&feature=youtu.be

Mapping lessons:

<https://cobras1st.weebly.com/>

Go to the tab that says “mapping” and choose the level you need.



Wednesday- Math (English)

The rest of this week we will work on mixing together addend unknown, change unknown, and comparing word problems. Watch the video below.

<https://youtu.be/Yc9noMG6qa8>

Go to Showbie to practice the word problems to the right and submit your work to your teacher.

There were 12 bunnies playing in the grass. Some more bunnies hopped there. Now there are 15 bunnies. How many bunnies hopped there?

Step 1- Write the equation (number sentence): _____

Step 2- Show your work to solve:

Step 3- Write the answer: _____ bunnies

My mom has 17 dogs. My dad has 10 dogs. How many fewer dogs does my dad have than my mom?

Step 1- Write the equation (number sentence): _____

Step 2- Show your work to solve:

Step 3- Write the answer: _____ dogs

My sister has 16 rings. 7 rings are gold and the rest are silver. How many of my sister's rings are silver?

Step 1- Write the equation (number sentence): _____

Step 2- Show your work to solve:

Step 3- Write the answer: _____ rings

Thursday Spelling and Phonics

1. Daily Letterland Lesson:

<https://youtu.be/Ow1Z--MizdM>

2. Mapping Phonics Lesson:

What is mapping?

https://www.youtube.com/watch?v=F3D_39l6fml&feature=youtu.be

Mapping lessons:

<https://cobras1st.weebly.com/>

Go to the tab that says “mapping” and choose the level you need.



Thursday- Math

Today you will practice more of the word problems that we have been working on.

Practice the word problems to the right and submit your work to your teacher on Remind.

13 dogs are playing fetch. 5 dogs go take a nap. How many dogs are playing fetch now?

Step 1- Write the equation (number sentence): _____

Step 2- Show your work to solve:

Step 3- Write the answer: _____ dogs

Sam had 12 bananas. He ate some of them. Now he has 7 bananas. How many bananas did he eat?

Step 1- Write the equation (number sentence): _____

Step 2- Show your work to solve:

Step 3- Write the answer: _____ bananas

Leo has 4 cans of soda. Kathy has 11 cans of soda. How many fewer cans of soda does Leo have than Kathy?

Step 1- Write the equation (number sentence): _____

Step 2- Show your work to solve:

Friday-ELA

Go to

<https://jr.brainpop.com/readingandwriting/writing/writingaparagraph/> and watch the Brain Pop Jr. Video on

paragraph writing. Then take the quiz after you watch. Take a picture of your work and send it to your teacher. :)

Log-in:

Username: bcox33

Password: Mooresville7652

Friday Spelling and Phonics

1. Daily Letterland Lesson:

<https://youtu.be/f4IbcdSnHio>

2. Mapping Phonics Lesson:

What is mapping?

https://www.youtube.com/watch?v=F3D_39I6fml&feature=youtu.be

Mapping lessons:

<https://cobras1st.weebly.com/>

Go to the tab that says “mapping” and choose the level you need.



Friday-Math

We continue to work on mixing together addend unknown, change unknown, and comparing word problems.

Answer the word problems to the right and submit your work to your teacher on Remind.

There are 19 grapes in a bowl. 8 grapes are green and the rest are purple. How many grapes are purple?

Step 1- Write the equation (number sentence): _____

Step 2- Show your work to solve:

Step 3- Write the answer: _____ grapes

Jayda has 19 grapes. Sam has 8 grapes. How many more grapes does Jayda have than Sam?

Step 1- Write the equation (number sentence): _____

Step 2- Show your work to solve:

Step 3- Write the answer: _____ grapes

There are 19 grapes in my bowl. I ate some. Now there are 6 grapes in my bowl. How many grapes did I eat?

Step 1- Write the equation (number sentence): _____

Step 2- Show your work to solve:

Step 3- Write the answer: _____ grapes